

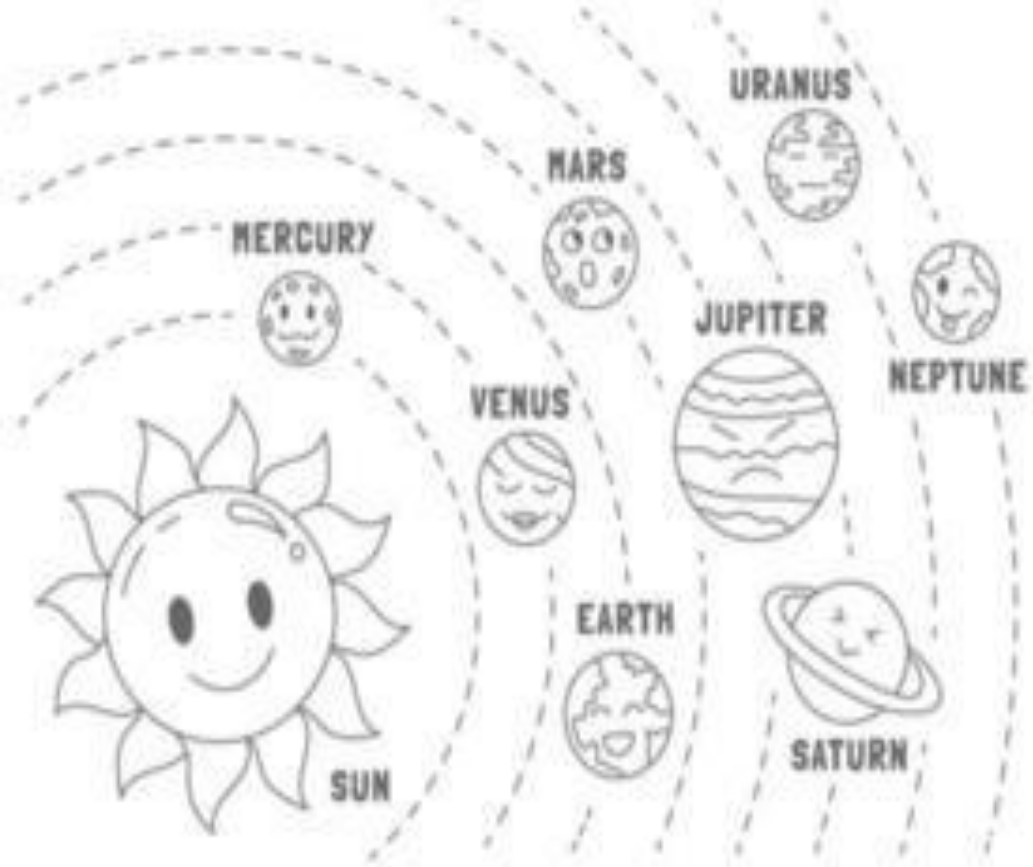




SECTION – A (HISTORY) 30 Marks		
I	Choose the correct option and write on your answer paper :-	5 Marks
1	Manuscripts were written on _____ leaves (a) Palm (b) Neem (c) Pine (d) None of these.	1 Mark
2	Engraved form of writing is known as _____. (a) Calligraphy (b) Inscription (c) Scribe (d) All of these.	1 Mark
3	The study of the historic origin of a royal family is called (a) Fossils (b) Geologists (c) Genealogy (d) All of these.	1 Mark
4	A _____ is a convenient tool to mark the events occurred in the past. (a) Calendar (b) Shadow (c) Compass (d) Timeline	1 Mark
5	Where is the National Museum of India located? (a) Delhi (b) Mumbai (c) Agra (d) Madhya Pradesh	1 Mark
II	Fill in the blanks: -	4 Marks
6	The word 'India' is derived from the _____ called Sindhu in Sanskrit.	1 Mark
7	The study of ancient human society and culture is made by the _____.	1 Mark
8	A small settlement or small village are called _____.	1 Mark
9	_____ is a book of tables which lists the days of each month along with related astronomical data.	1 Mark
III	Match the following: -	5 Marks
	Column A Column B	
10	Sulaiman and Kirithar hills a. Cities about 2500 years ago	1 Mark
11	Ganga Valley b. A life that begins after death.	1 Mark
12	Gautama Buddha c. The First Cities	1 Mark
13	Era d. 560 BCE	1 Mark
14	Afterlife e. Modern day Pakistan.	1 Mark
	f. A distinct period of time.	
IV	Answer in one or two sentences:-	4 Marks
15	What is 'Excavation'?	1 Mark

16	Who are called 'Skilled Gatherers'?	1 Mark	
17	Who are 'Archaeologists'?	1 Mark	
18	Who are 'Historians'?	1 Mark	
V	Answer the Following:-	4 Marks	
19	What was the definition given by 'E H Carr' on History?	2 Marks	
20	Distinguish between Geologists and Palaeontologist.	2 Marks	
VI	Observe the picture given below and answer the following questions: -  a. Identify the above picture b. Where is it situated? c. What do the 4 Lion indicate?	3 Marks 1 Mark 1 Mark 1 Mark	
VII	Answer the following: -	5 Marks	
21	Explain the various sources which help us to measure time and understand History?	5 Marks	
SECTION – B (Civics) 20 Marks			
VIII	Choose the correct option and write on your answer paper : -	3 Marks	
22	What are the two types of government? (a)Democracy (b) Monarchy (c) Both a and b (d) None of these.	1 Mark	
23	What is the meaning of 'Cooperation'? (a)To eat together (b)To read together (c)To work together (d)To write together	1 Mark	
24	Shalini belongs to the state of _____ (a)Tamil Nadu (b) Gujarat (c) Mumbai (d) Kerala	1 Mark	
IX	Fill in the blanks: -	2 Marks	
25	_____ means that all adults in the country are allowed to vote.	1 Mark	
26	_____ was the owner of a small auto-fabrication workshop.	1 Mark	
X	Match the following: -	2 Marks	
27	Column A The Supreme Court	Column B a. Father's father	1 Mark
28	Chitti	b. Highest court of judgment	1 Mark
		c. Aunt	
XI	Answer in one or two sentence:-	3 Marks	
29	Under which circumstances a person can approach the court?	1 Mark	
30	What is 'women's suffrage'?	1 Mark	
31	What was the occupation of Shalini's mother?.	1 Mark	
XII	Answer in brief:-	4 Marks	
32	Why does Tenzing's father consult his wife for special expenses?	2 Marks	

33	Observe the picture given below and answer the following questions: -  a) Identify the type of family in the above picture. b) Who are the members in this type of family?	2 Marks 1 Mark 1 Mark												
XIII	Answer the following: -	6 Marks												
34	Why do you think that the government needs to make rules for everyone in the form of laws?	3 Marks												
35	What are the various factors which binds the relationship among the members in a family?	3 Marks												
SECTION – C (Geography) 30 Marks														
XIV	Choose the correct option and write on your answer paper : -	3 Marks												
1	Millions of galaxies make the _____. (a) Meteoroid (b) Universe (c) Asteroids (d) Constellation	1 Mark												
2	A collection of maps are called _____. (a)Atlas (b) Globe (c) World map (d) None of these.	1 Mark												
3	The Latitudes and Longitudes intersect each other to form a _____. (a)Time (b) Direction (c) Grid (d) All of these.	1 Mark												
XV	Fill in the blanks: -	3 Marks												
4	_____ the biggest planet in the Solar System.	1 Mark												
5	The Prime Meridian passes through Greenwich, an area of London in _____.	1 Mark												
6	A person who prepare or sketch the map is known as _____.	1 Mark												
XVI	Match the following: -	4 Marks												
	<table><tr><th>Column A</th><th>Column B</th></tr><tr><td>7 Dwarf Planet</td><td>a. Amavasya</td></tr><tr><td>8 New Moon</td><td>b. Geoid</td></tr><tr><td>9 GMT</td><td>c. Venus</td></tr><tr><td>10 Shape of the Earth</td><td>d.Pluto</td></tr><tr><td></td><td>e. Greenwich Mean Time</td></tr></table>	Column A	Column B	7 Dwarf Planet	a. Amavasya	8 New Moon	b. Geoid	9 GMT	c. Venus	10 Shape of the Earth	d.Pluto		e. Greenwich Mean Time	
Column A	Column B													
7 Dwarf Planet	a. Amavasya													
8 New Moon	b. Geoid													
9 GMT	c. Venus													
10 Shape of the Earth	d.Pluto													
	e. Greenwich Mean Time													
7	Dwarf Planet	a. Amavasya	1 Mark											
8	New Moon	b. Geoid	1 Mark											
9	GMT	c. Venus	1 Mark											
10	Shape of the Earth	d.Pluto	1 Mark											
		e. Greenwich Mean Time												
XVII	Answer in one or two sentence:-	2 Marks												
11	What is a Pole Star?	1 Mark												
12	Define the cardinal and intermediate directions.	1 Mark												
XVIII	Answer in brief:-	4 Marks												
13	How maps are useful? Name the important components of a map?	2 Marks												
14	Distinguish between Latitudes and Longitudes.	2 Marks												
XIX	Answer the following: -	9 Marks												
15	Explain the three types of maps.	3 Marks												

16	Draw the following symbols: - a, River b, Settlement c, Metalled road	3 Marks
17	<p>Observe the diagram given below and answer the following questions: -</p>  <p>a. Name the fourth nearest planet to the sun b. Which planet is known as 'Earth's Twin'? c. Which is the seventh planet in the solar system?</p>	<p>3 Marks</p> <p>1 Mark 1 Mark 1 Mark</p>
XX	On the given outline map of India, mark and colour the following states: - (a) Kerala (b) Bihar (c) Gujarat (d) Karnataka (e) Tamil Nadu	5 Marks

CLASS:VI.Q.XX. Geography. SET-1

India Political Map

